




Τάξη Γ'

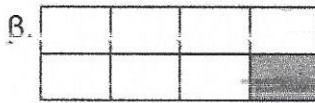
Όνομα _____

Επώνυμο _____


Τι μέρος κάθε σχήματος είναι χρωματισμένο;
Βάζω σε κύκλο το κατάλληλο κλάσμα:




- $\frac{1}{2}$ $\frac{1}{3}$ $\frac{1}{4}$



- $\frac{1}{4}$ $\frac{1}{6}$ $\frac{1}{8}$




- $\frac{1}{2}$ $\frac{1}{3}$ $\frac{1}{4}$

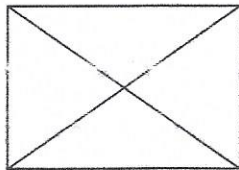


- $\frac{1}{2}$ $\frac{1}{3}$ $\frac{1}{4}$

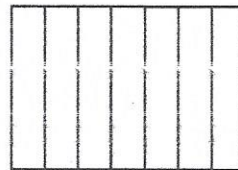
2. Χρωματίζω το μέρος του σχήματος που λέει κάθε κλάσμα:



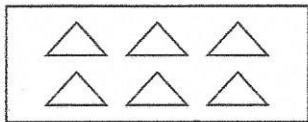
$\frac{1}{5}$



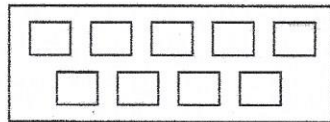
$\frac{1}{4}$



$\frac{1}{7}$

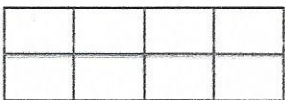


$\frac{1}{6}$

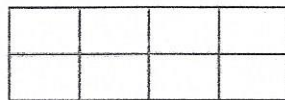


$\frac{1}{9}$

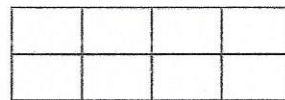
3. Χρωματίζω το:



$\frac{1}{2}$



$\frac{1}{4}$



$\frac{1}{8}$