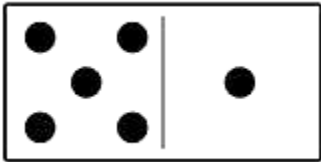


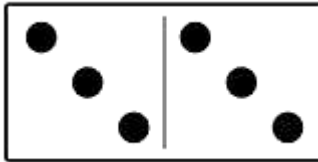
Όνομα: _____

Ο αριθμός 6

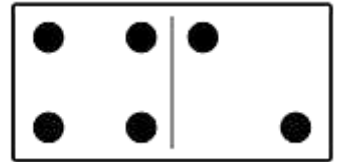
Λογαριάζω και συμπληρώνω.



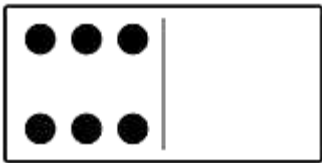
$$... + ... = ...$$



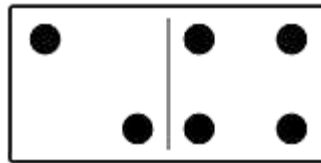
$$... + ... = ...$$



$$... + ... = ...$$

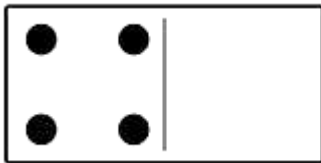


$$... + ... = ...$$

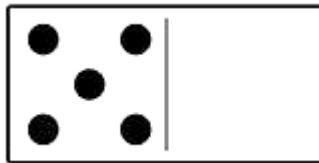


$$... + ... = ...$$

Συμπληρώνω τις κουκκίδες που λείπουν για να φτιάξω το 6 και λογαριάζω.



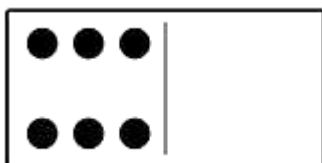
$$6 = ... + ...$$



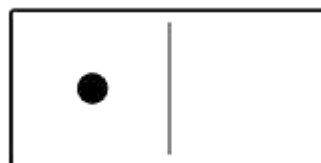
$$6 = ... + ...$$



$$6 = ... + ...$$



$$6 = ... + ...$$

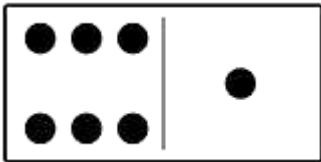


$$6 = ... + ...$$

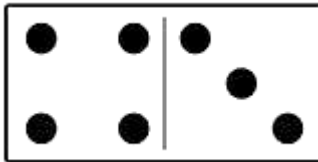
Όνομα: _____

Ο αριθμός 7

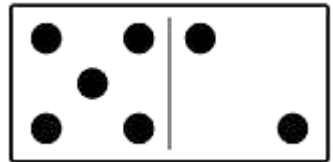
Λογαριάζω και συμπληρώνω.




$$\dots + \dots = \dots$$



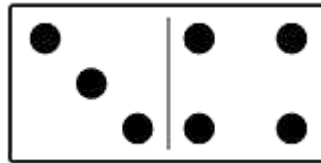
$$\dots + \dots = \dots$$



$$\dots + \dots = \dots$$

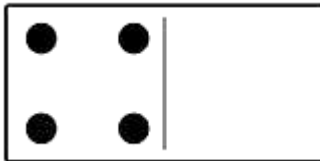


$$\dots + \dots = \dots$$

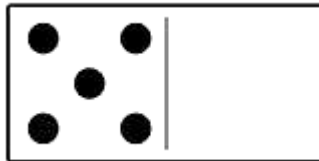


$$\dots + \dots = \dots$$

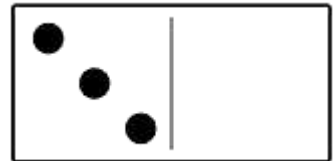
Συμπληρώνω τις κουκκίδες που λείπουν για να φτιάξω το 7 και λογαριάζω.



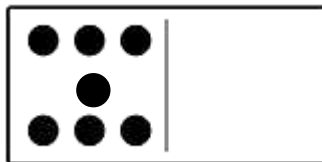
$$7 = \dots + \dots$$



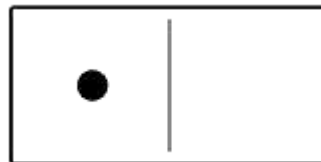
$$7 = \dots + \dots$$



$$7 = \dots + \dots$$



$$7 = \dots + \dots$$

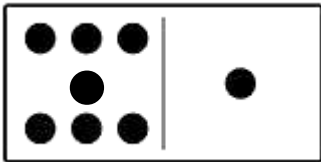


$$7 = \dots + \dots$$

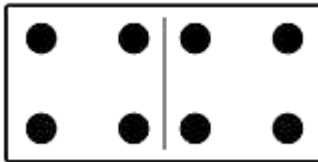
Όνομα: _____

Ο αριθμός 8

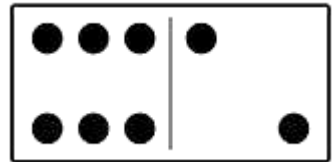
Λογαριάζω και συμπληρώνω.



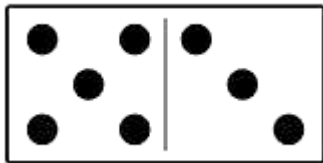
$$\dots + \dots = \dots$$



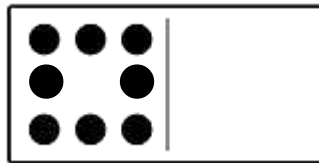
$$\dots + \dots = \dots$$



$$\dots + \dots = \dots$$

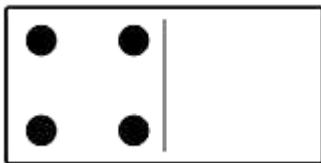


$$\dots + \dots = \dots$$

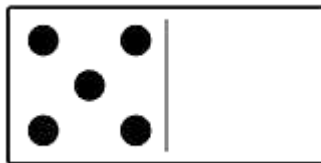


$$\dots + \dots = \dots$$

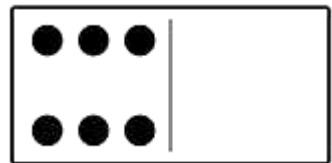
Συμπληρώνω τις κουκκίδες που λείπουν για να φτιάξω το 8 και λογαριάζω.



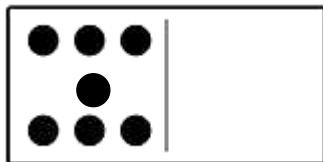
$$8 = \dots + \dots$$



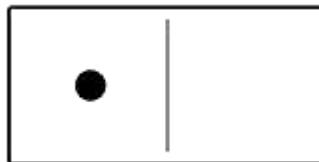
$$8 = \dots + \dots$$



$$8 = \dots + \dots$$



$$8 = \dots + \dots$$




$$7 = \dots + \dots$$

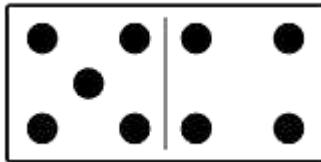
Όνομα: _____

Ο αριθμός 9

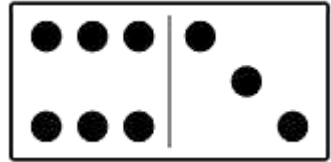
Λογαριάζω και συμπληρώνω.



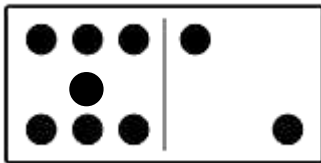
$$\dots + \dots = \dots$$



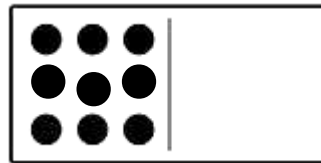
$$\dots + \dots = \dots$$



$$\dots + \dots = \dots$$

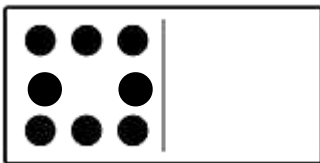


$$\dots + \dots = \dots$$

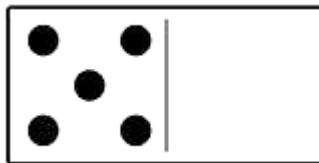


$$\dots + \dots = \dots$$

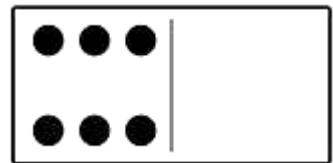
Συμπληρώνω τις κουκκίδες που λείπουν για να φτιάξω το 9 και λογαριάζω.



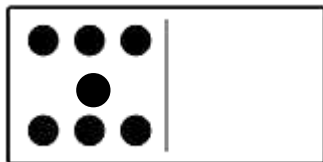
$$9 = \dots + \dots$$



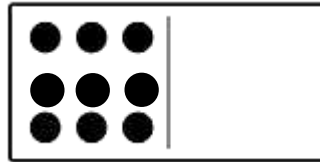
$$9 = \dots + \dots$$



$$9 = \dots + \dots$$



$$9 = \dots + \dots$$




$$9 = \dots + \dots$$

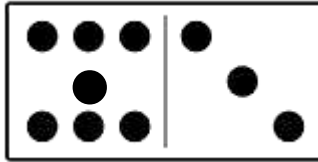
Όνομα: _____

Ο αριθμός 10

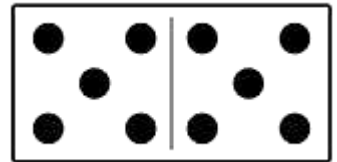
Λογαριάζω και συμπληρώνω.



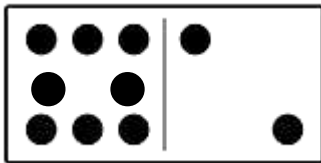
$$\dots + \dots = \dots$$



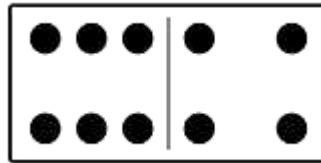
$$\dots + \dots = \dots$$



$$\dots + \dots = \dots$$

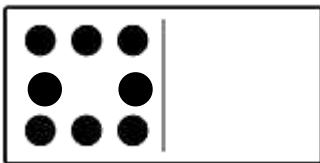


$$\dots + \dots = \dots$$

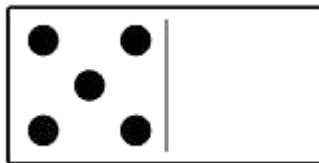


$$\dots + \dots = \dots$$

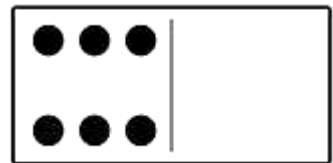
Συμπληρώνω τις κουκκίδες που λείπουν για να φτιάξω το 10 και λογαριάζω.



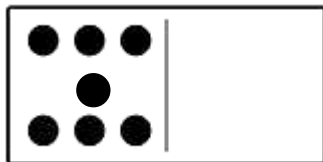
$$10 = \dots + \dots$$



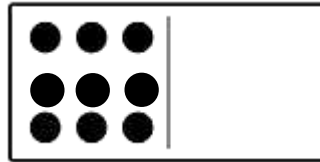
$$10 = \dots + \dots$$



$$10 = \dots + \dots$$



$$10 = \dots + \dots$$

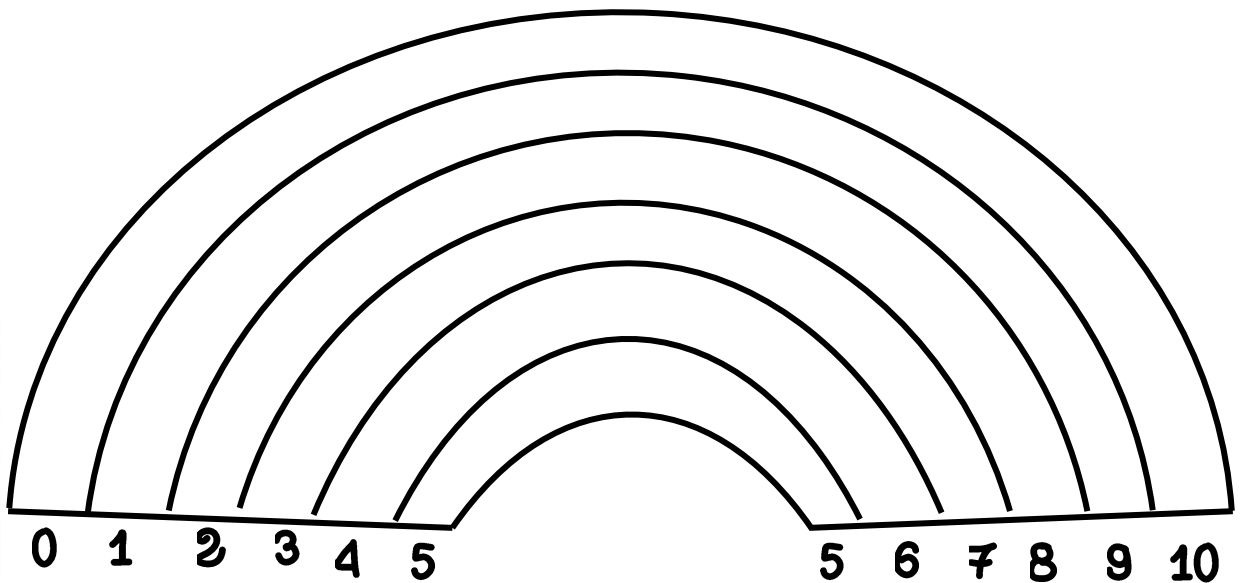


$$10 = \dots + \dots$$

Όνομα: _____

Χρωμάτισε το 10!

Χρωμάτισε ένα ημικύκλιο του ουράνιου τόξου. Δες τους αριθμούς που είναι στην αρχή και στο τέλος του. Υπολόγισε το άθροισμά τους. Γράψε την πράξη.
Κάνε το ίδιο αλλά ξεκίνα από την αντίθετη κατεύθυνση. Γράψε την πράξη δίπλα.
Τι παρατηρείς;



$$\underline{\quad} + \underline{\quad} = \underline{\quad}$$

$$\underline{\quad} + \underline{\quad} = \underline{\quad}$$

$$\underline{\quad} + \underline{\quad} = \underline{\quad}$$

$$\underline{\quad} + \underline{\quad} = \underline{\quad}$$

$$\underline{\quad} + \underline{\quad} = \underline{\quad}$$

$$\underline{\quad} + \underline{\quad} = \underline{\quad}$$

$$\underline{\quad} + \underline{\quad} = \underline{\quad}$$

$$\underline{\quad} + \underline{\quad} = \underline{\quad}$$

$$\underline{\quad} + \underline{\quad} = \underline{\quad}$$

$$\underline{\quad} + \underline{\quad} = \underline{\quad}$$